


# Plotting integers on a number line: Worksheet 1.2

Name ..... Date ..... Score .....

1. Which letter best shows  $-95$ ?



2. Which letter best shows  $-29$ ?




3. Which letter best shows  $17$ ?



4. Which letter best shows  $104$ ?



5. Which letter best shows  $-90$ ?



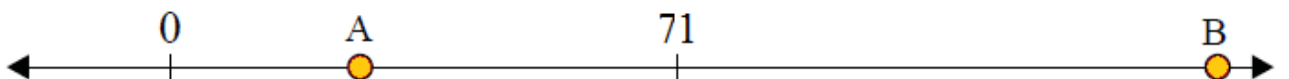
6. Which letter best shows  $78$ ?




7. Which letter best shows  $-18$ ?



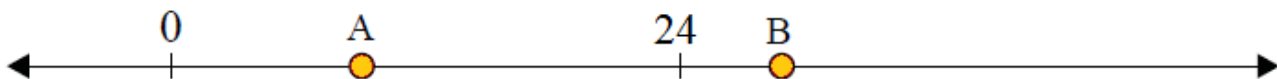
8. Which letter best shows  $30$ ?



9. Which letter best shows  $-21$ ?



10. Which letter best shows  $28$ ?



## Solutions: Worksheet 1.2

1. A
2. B
3. A
4. B
5. A
6. A
7. B
8. A
9. B
10. B

