


Plotting integers on a number line: Worksheet 1.1

Name Date Score

1. Which letter best shows -31 ?




2. Which letter best shows -101 ?




3. Which letter best shows 52 ?



4. Which letter best shows 72 ?



5. Which letter best shows -47 ?



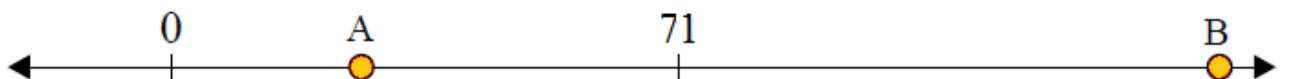
6. Which letter best shows 130 ?




7. Which letter best shows -115 ?



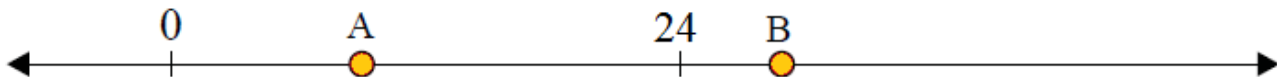
8. Which letter best shows 160 ?



9. Which letter best shows -83 ?



10. Which letter best shows 8 ?



Solutions: Worksheet 1.1

1. B
2. A
3. B
4. A
5. B
6. B
7. A
8. B
9. A
10. A

