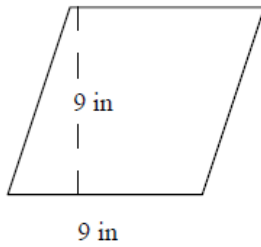


Area of a parallelogram: Worksheet 16.3

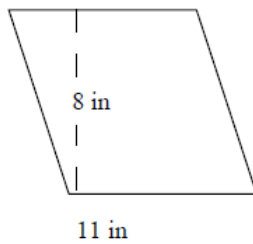
Name Date Score

Find the areas of the following parallelograms.

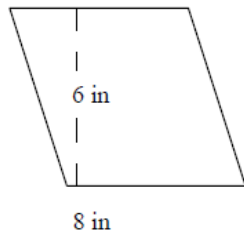
1.



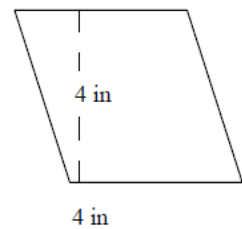
2.



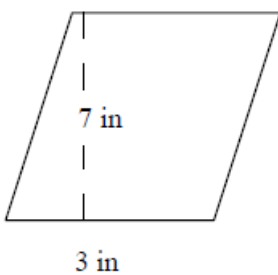
3.



4.

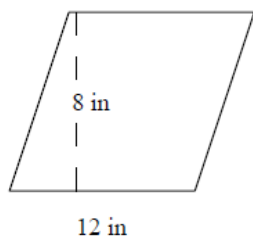


5.

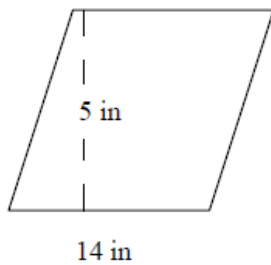


Solutions: Worksheet 16.3

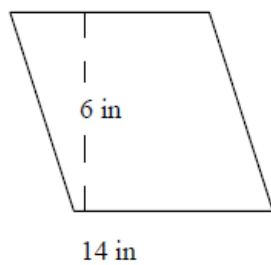
6.



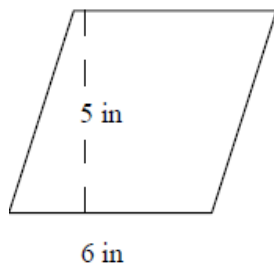
7.



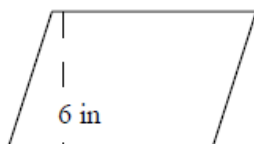
8.



9.



10.



Solutions: Worksheet 16.3

1. Area of parallelogram = 81 square inches
2. Area of parallelogram = 88 square inches
3. Area of parallelogram = 48 square inches
4. Area of parallelogram = 16 square inches
5. Area of parallelogram = 21 square inches
6. Area of parallelogram = 96 square inches
7. Area of parallelogram = 70 square inches
8. Area of parallelogram = 84 square inches
9. Area of parallelogram = 30 square inches
10. Area of parallelogram = 54 square inches

