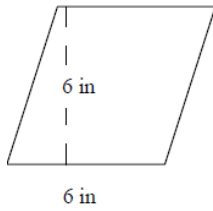


Area of a parallelogram: Worksheet 16.1

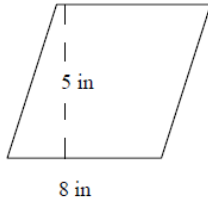
Name Date Score

Find the areas of the following parallelograms.

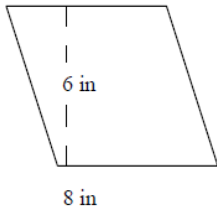
1.



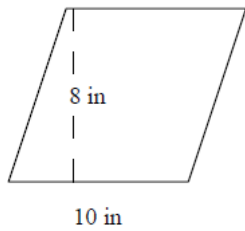
2.



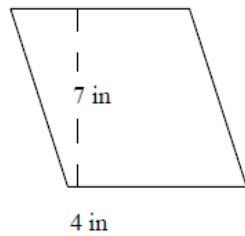
3.



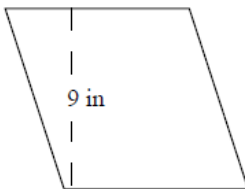
4.



5.

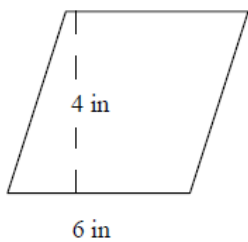


6.

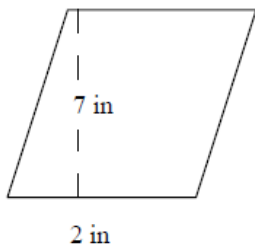


Solutions: Worksheet 16.1

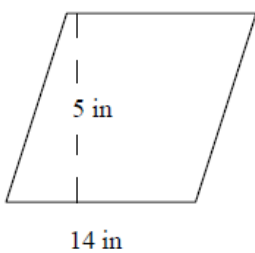
7.



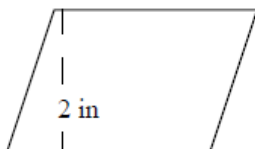
8.



9.



10.



Solutions: Worksheet 16.1

1. Area of parallelogram = 36 square inches
2. Area of parallelogram = 40 square inches
3. Area of parallelogram = 48 square inches
4. Area of parallelogram = 80 square inches
5. Area of parallelogram = 28 square inches
6. Area of parallelogram = 63 square inches
7. Area of parallelogram = 24 square inches
8. Area of parallelogram = 14 square inches
9. Area of parallelogram = 70 square inches
10. Area of parallelogram = 16 square inches

