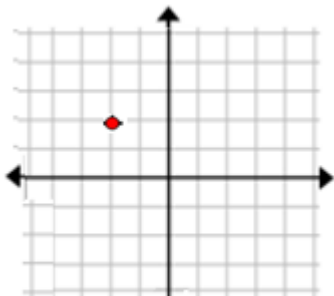


# Naming the quadrant or axis of a point given its graph: Worksheet 7.2

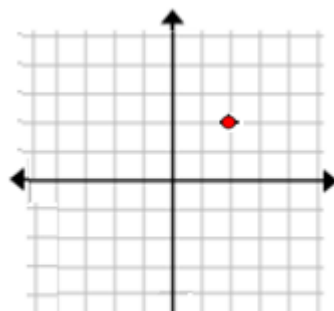
Name ..... Date ..... Score .....

Name the quadrant or axis of the point in each of the following graphs.

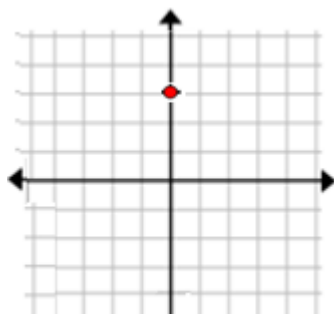
1.



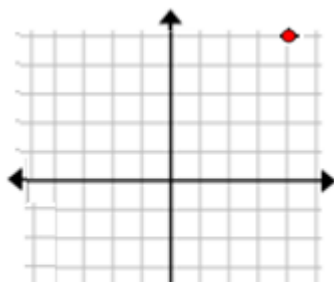
2.



3.

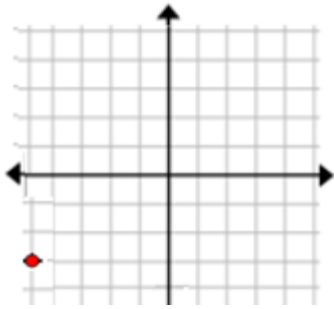


4.

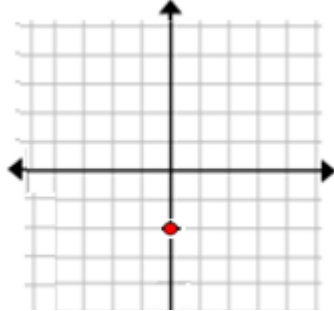


# Worksheet 7.2

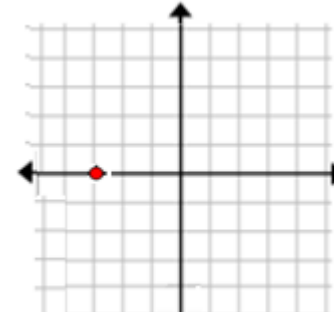
5.



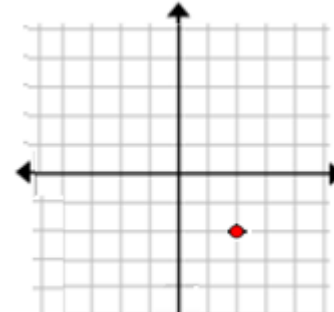
6.



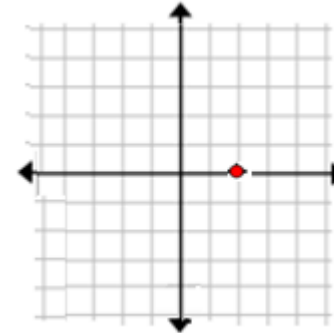
7.



8.

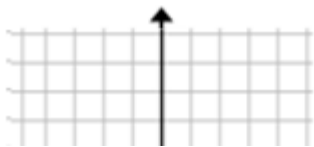


9.



## Worksheet 7.2

10.



### Solutions: Worksheet 7.2

1. Quadrant 2
2. Quadrant 1
3. Positive Y Axis
4. Quadrant 1
5. Quadrant 3
6. Negative Y axis
7. Negative X Axis
8. Quadrant 4
9. Positive X Axis
10. Quadrant 3

