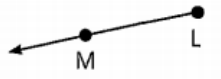


Naming Segments, Rays, and Lines: Worksheet 3.3

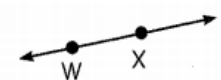
Name Date Score

Identify each figure as a line segment, a ray or a line. Then name the figure using the given points.

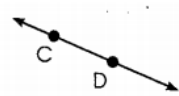
1.



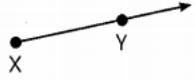
2.



3.



4.



5.



6.



7.



8.



9.



10.



Solutions: Worksheet 3.3

1. Ray LM
2. Line WX
3. Line CD
4. Ray XY
5. Line segment DE
6. Line segment JK
7. Ray HI
8. Line UT
9. Ray DT
10. Line segment XY

