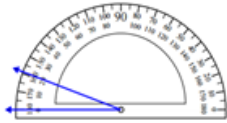


# Measuring an angle with the protractor: Worksheet 1.3

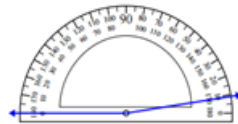
Name ..... Date ..... Score .....

Measure each of the angles given below using the protractor.

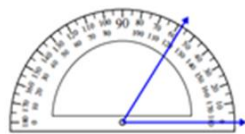
1.



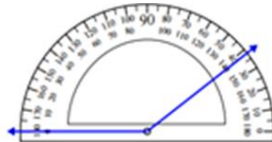
2.



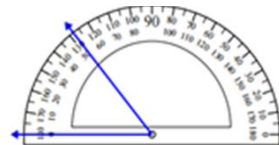
3.



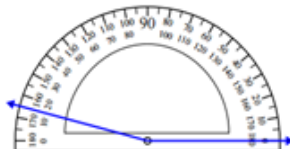
4.



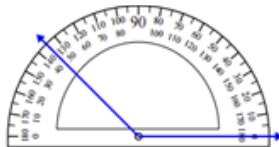
5.



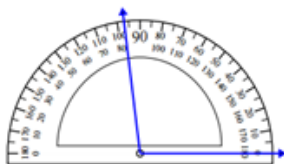
6.



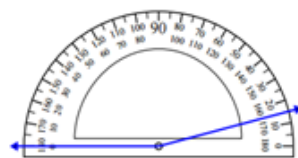
7.



8.

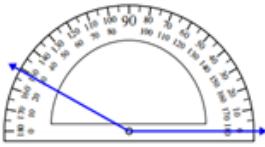


9.



## Solutions: Worksheet 1.3

10.



1.  $20^\circ$
2.  $170^\circ$
3.  $58^\circ$
4.  $142^\circ$
5.  $52^\circ$
6.  $165^\circ$
7.  $135^\circ$
8.  $97^\circ$
9.  $165^\circ$
10.  $150^\circ$

