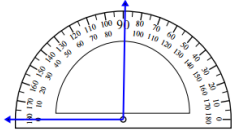


# Measuring an angle with the protractor: Worksheet 1.1

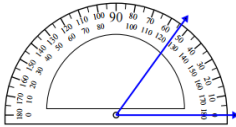
Name ..... Date ..... Score .....

Measure each of the angles given below using the protractor.

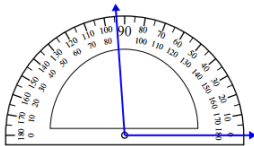
1.



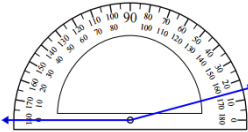
2.



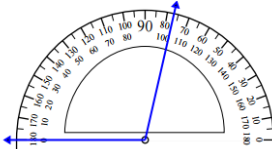
3.



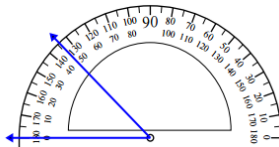
4.



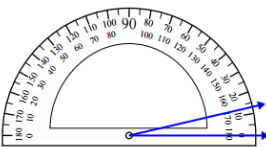
5.



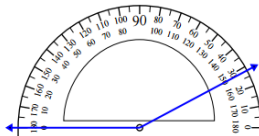
6.



7.

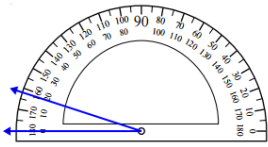


8.

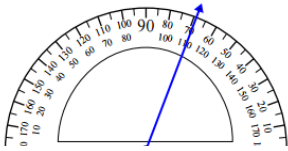


# Solutions: Worksheet 1.1

9.



10.



1.  $90^\circ$

2.  $50^\circ$

3.  $95^\circ$

4.  $165^\circ$

5.  $102.5^\circ$

6.  $45^\circ$

7.  $13^\circ$

8.  $152^\circ$

9.  $18^\circ$

10.  $110^\circ$

