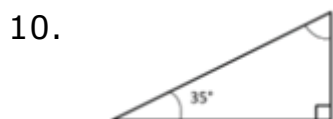
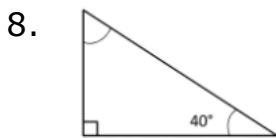
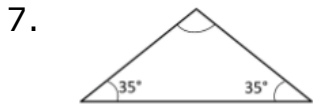
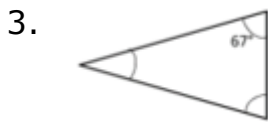
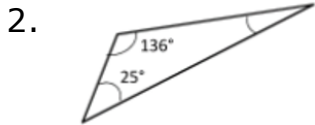


Finding an angle measure of a triangle given two angles: Worksheet 7.2

Name Date Score

Find the missing angles in the given triangles below. Sum of angles in a triangle is 180° .



Solutions: Worksheet 7.2

1. $28^\circ, 28^\circ$
2. 19°
3. $67^\circ, 46^\circ$
4. 59°
5. 24°
6. 141°
7. 110°
8. 50°
9. 28°
10. 55°

