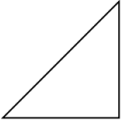


Classifying scalene, isosceles, and equilateral triangles by side lengths or angles: Worksheet 6.3

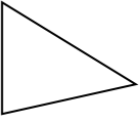
Name Date Score

Identify each of the triangles as equilateral, isosceles or scalene triangles.

1.



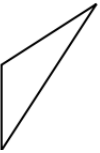
2.



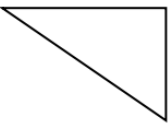
3.



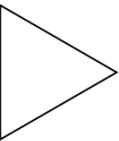
4.



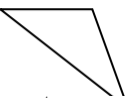
5.



6.



7.



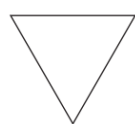
8.



9.



10.



Solutions: Worksheet 6.3

1. Isosceles triangle
2. Scalene triangle
3. Isosceles triangle
4. Scalene triangle
5. Scalene triangle
6. Equilateral triangle
7. Scalene triangle
8. Isosceles triangle
9. Scalene triangle
10. Equilateral triangle

