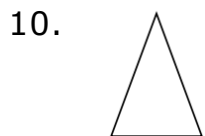
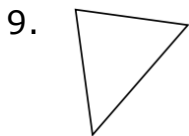
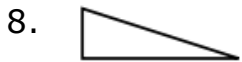
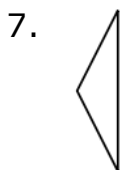
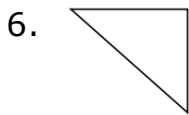
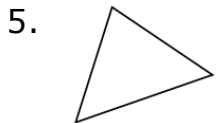
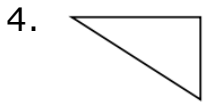
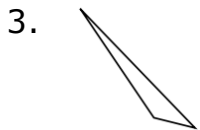
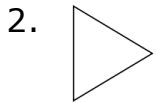
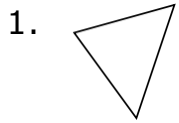


# Acute, Obtuse, and Right Triangles: Worksheet 6.2

Name ..... Date ..... Score .....

Identify each of the triangles as equilateral, isosceles or scalene triangles.



## Solutions: Worksheet 6.2

1. Scalene triangle
2. Equilateral triangle
3. Scalene triangle
4. Scalene triangle
5. Equilateral triangle
6. Isosceles triangle
7. Isosceles triangle
8. Scalene triangle
9. Scalene triangle
10. Isosceles triangle

