

Acute, obtuse, and right angles: Worksheet 2.3

Name Date Score

Classify each angle as acute, obtuse, right or straight

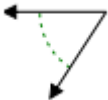
1.



2.



3.



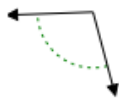
4.



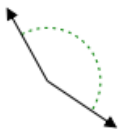
5.



6.



7.



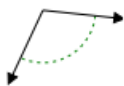
8.



9.



10.



Solutions: Worksheet 2.3

1. Obtuse angle
2. Right angle
3. Acute angle
4. Acute angle
5. Obtuse angle
6. Obtuse angle
7. Obtuse angle
8. Acute angle
9. Acute angle
10. Obtuse angle

